

STANDARD JUNIOR SCHOOL – ZZANA

MID TERM ONE BREAK – HOME TESTS, 2020

SOCIAL STUDIES (SET 2)

PRIMARY FOUR

Time Allowed: 2 hours 15 minutes



SECTION A	
SECTION B	
TOTAL	

Name:

SECTION A

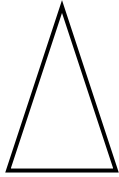
1. Write SST in full.

2. Name the first animal to be tamed by man.

3. Give one example of a natural forest.

4. What do we call the movement of people and goods from one place to another?

5. What does the symbol below represent on a map?



6. Name the main natural source of water.

7. Mention one crop grown in swamps.


8. Write down the motto of your school.

9. What is a legend?

10. Where does the sun rise from?

11. In which region is Kampala capital city located?

12. What is the main duty of the police?

13.  Name the road sign shown above.

14. Explain the term environment.

15. Write down one example of a radio station in Uganda.

16. Who is believed to be the first Muganda?

17. Name the school symbol which is always observed on school assemblies.

18. What do we call the imaginary lines on a map that runs from East to West?

19. Give one example of a lake found in Uganda.

20. **Draw a map of a tree in the space below.**




21. How useful is a uniform to a school child?

22. Where do doctors work?

23. Name one source of light.

24. Where do sick people go for treatment?

25. What do we call the highest point of a mountain?

26.  Name the craft shown above.

27. Give one use of lakes to man.

28. Mention one use of forests to man.

29. Name one animal used for transport.

30. What term is given to a person below eighteen years of age?

31. Name one immunisable disease you know.

32. Give one example of children's rights.

33. Identify one reason why people cut down trees.

34. Which map element enables a map reader to tell what a map is about?

35. State one example of a community place.

For numbers 36 – 40, answer Either Christianity or Islam but not both in one number.

36. **Either:** Who is said to be the creator of heaven and earth?

Or: Who is said to be the creator of heaven and earth?

37. **Either:** Name the first man according to Christianity.

Or: Name the first man according to Islam.

38. **Either:** Who is a prophet?

Or: Who is a Muazzin?

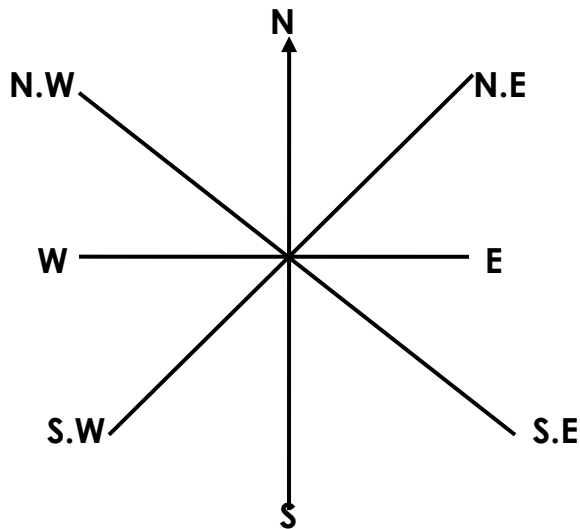
39. **Either:** On which day do Christian go for congregational prayers?

Or: On which day do Muslims go for Juma prayers?

40. Either: Write down any one symbol of a Christian family.

Or: Write one symbol in Islam.

SECTION B



41. a) Name the instrument shown above.

b) Mention any two groups of people who use the above instrument.

i) _____ ii) _____

c) In which direction does the main needle of the above instrument always point?

42. a) List down any two domestic animals.

i) _____ ii) _____

b) Mention two things got from domestic animals.

i) _____ ii) _____

43. a) What is the use of water to man?

b) Mention three places where water can be got from.

i) _____ iii) _____

ii) _____

44. a) Write the following in short:

i) The AIDS Support Organisation

ii) Local Council

b) What title is given to the political head of a district?

c) What are by-laws?

45. a) Identify the three elements of a map.

i) _____

ii) _____

iii) _____

b) Why are map symbols used on a map?

46. a) Define the following terms;

i) Food crops

ii) Cash crops

iii) Non-traditional cash crops

b) Write down one example of food crop.

47. a) List down any three colours of the Uganda National Flag.

i) _____

ii) _____

iii) _____

b) Who designed the Uganda National Flag?

48. a) What are physical features?

b) Give three examples of physical features.

i) _____

- ii) _____
- iii) _____

49. Write down the following in full.

- i) DPC _____
- ii) U.P.E _____
- iii) RDC _____
- iv) DR _____

50. a) Identify any one lake in Uganda which is used for salt mining.

b) Name two rivers in Uganda.

- i) _____
- ii) _____

c) Which is the longest river in Uganda?

For numbers 51 – 55, answer either Christianity or Islam but not both.

51. Either:

a) How long did God take to create the world?

b) Why Did God create man?

c) On which day did God rest after the work of creation?

d) Apart from man, mention one other creature of God.

Or:

a) How long did Allah's creation take?

b) Why did Allah create man?

c) On which day did Allah rest after the work of creation?

d) Apart from man, mention one other creature of Allah.

52. Either:

a) What does the term gospel mean?

b) Write three gospel books in the Bible.

i) _____

iii) _____

ii) _____

Or:

a) What does the term Hegira mean?

b) Write down three Holy books in Islam.

i) _____

iii) _____

ii) _____

53. Either:

a) Which son of Adam was killed by his brother?

b) Why did the son of Adam kill his brother?

c) Give one way in which God punishes sinners.

d) What should a P.4 child do after sinning?

Or: Give any four things which a Muslim who is fasting is advised to do.

i) _____

ii) _____

iii) _____

iv) _____

54. Either:

a) According to the Bible whom did God call in a burning bush?

b) What did the above person do to show that he was standing on a holy land?

c) Why did God call the above person?

d) State one quality that the above person showed to God.

Or:

a) What is Saum?

b) In which holy month is Saum performed?

c) State two benefits of Saum.

- i) _____
- ii) _____

55. Either:

a) Name the prayer that Jesus taught his disciples.

b) State two requests made in the above prayer.

- i) _____
- ii) _____

c) Write down one reason why Christians should pray.

Or:

a) What is the duty of Imam to Muslims?

b) Mention any three prayers Muslims pray in a day.

- i) _____
- ii) _____
- iii) _____

******END******